

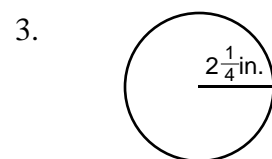
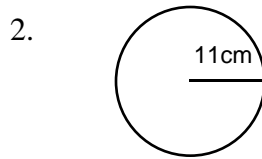
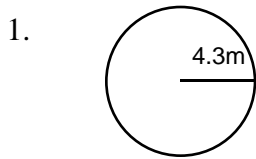
EXTRA PRACTICE 29

Circles

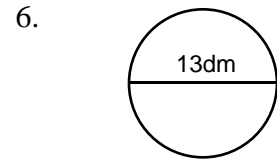
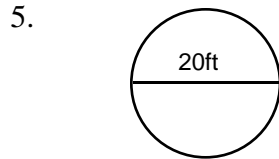
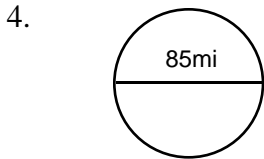
Use after Section 8.6

Name _____

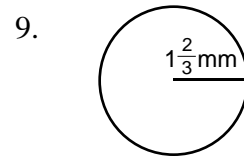
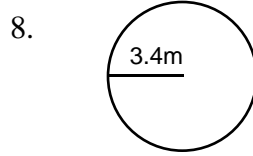
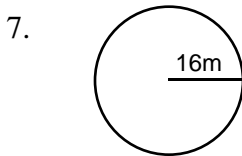
Find the diameter.



Find the radius.

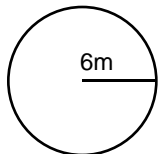


Find the circumference. Use 3.14 for π .

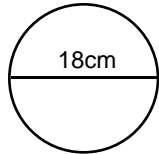


Find the area.

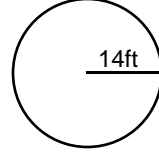
10. Use 3.14 for π .



11. Use 3.14 for π .

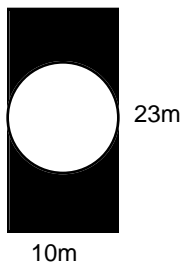


12. Use for π .



Find the area of the shaded regions. Use 3.14 for π .

13.



14.

